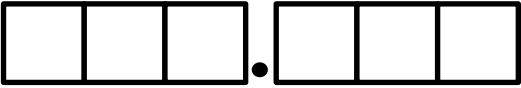
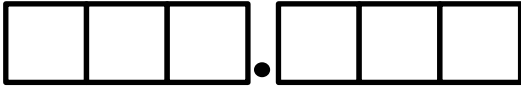
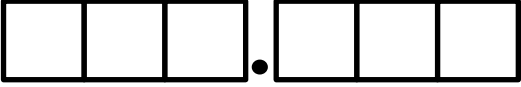




ROUNDING ROUND-UP

Name: _____

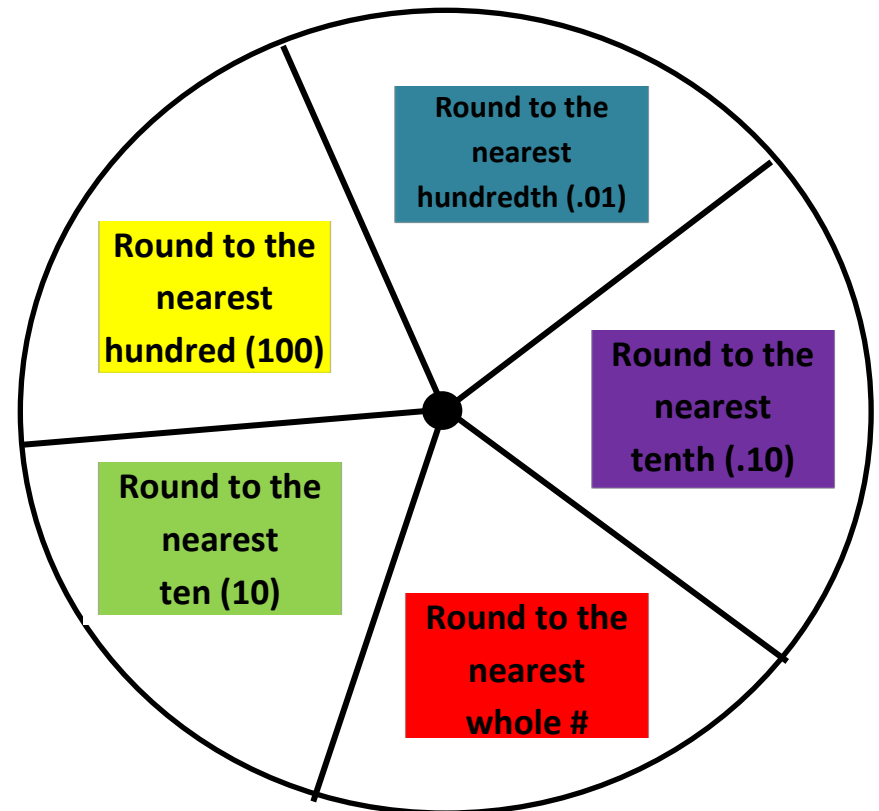
Number	Round to nearest	Number Line	My number is rounded to					
	hundred ten whole tenth hundredth					.		
	hundred ten whole tenth hundredth					.		
	hundred ten whole tenth hundredth					.		
	hundred ten whole tenth hundredth					.		
	hundred ten whole tenth hundredth					.		
Total						.		

ROUNDING ROUND-UP

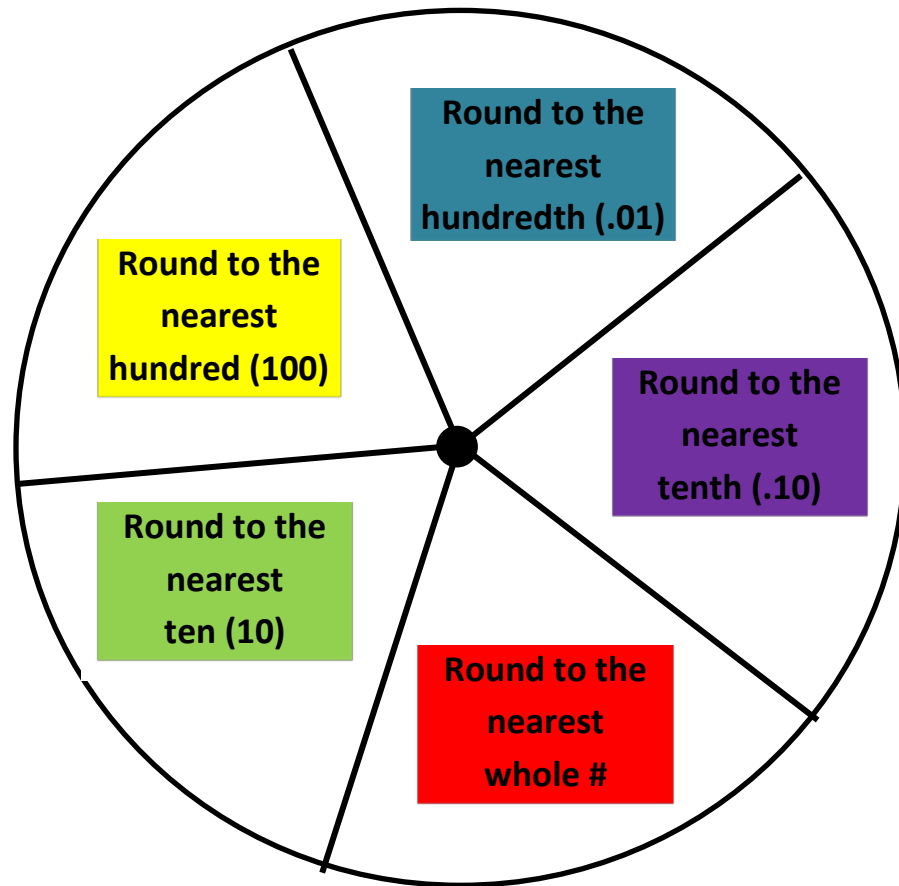
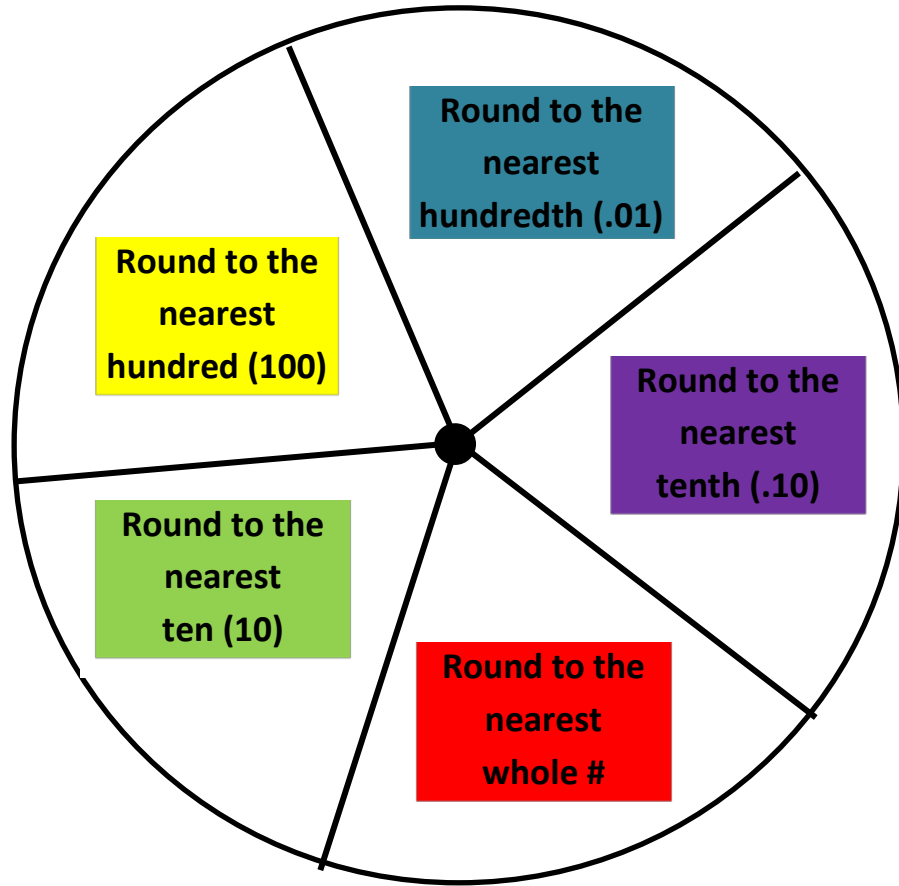
--	--	--	--	--	--

Directions for 2 players:

1. Shuffle number cards and place face down in a pile on the table.
2. Each player has their own recording paper.
3. **First player:** Turn over one card at a time and place in the above spots from left to right. This is the number you will be rounding. Write the # on your paper.
4. Spin the spinner by placing the paper clip in the center held in place by a pencil point. Circle the term in column 2.
5. Draw your number line in column 3. Show the following:
 - The 3 benchmark numbers
 - Where your # is on the number line
 - Circle the benchmark # your number is rounded to
6. Write your rounded number in the last columns (one digit per column). Remove number cards.
7. **Second player** takes their turn.
8. Winner is player with the highest total after 5 rounds.

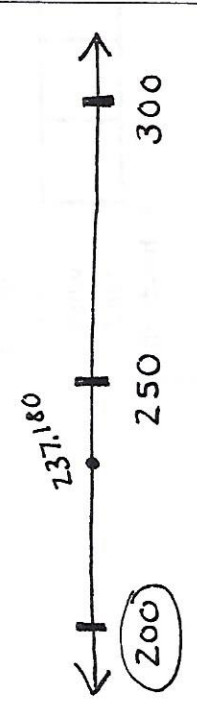
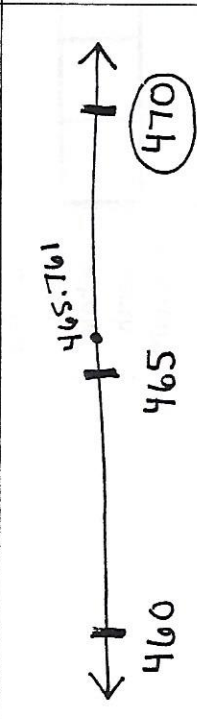
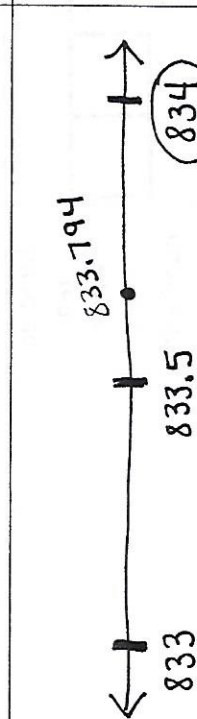
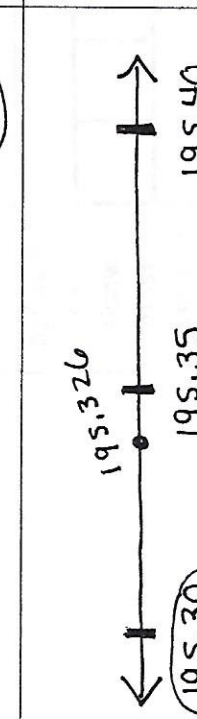
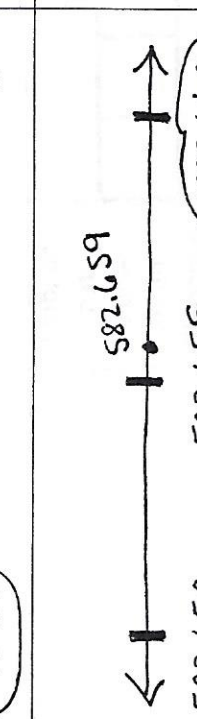


0	0	0	1	1	1
2	2	2	3	3	3
4	4	4	5	5	5
6.	6.	6.	7	7	7
8	8	8	9.	9.	9.



ROUNDING ROUND-UP

Name: Sample

Number	Round to nearest	Number Line	My number is rounded to
$\begin{array}{ c c c c } \hline 2 & 3 & 7 & 1 \\ \hline \end{array} \begin{array}{ c } \hline 80 \\ \hline \end{array}$	<u>hundred</u> ten whole tenth hundredth		200.00
$\begin{array}{ c c c } \hline 4 & 6 & 5 \\ \hline \end{array} \begin{array}{ c } \hline 761 \\ \hline \end{array}$	hundred <u>ten</u> whole tenth hundredth		470.00
$\begin{array}{ c c c } \hline 8 & 3 & 3 \\ \hline \end{array} \begin{array}{ c } \hline 794 \\ \hline \end{array}$	hundred ten <u>whole</u> tenth hundredth		834.00
$\begin{array}{ c c c c } \hline 1 & 9 & 5 & 3 \\ \hline \end{array} \begin{array}{ c } \hline 26 \\ \hline \end{array}$	hundred ten whole <u>tenth</u> hundredth		195.30
$\begin{array}{ c c c c } \hline 5 & 8 & 2 & 6 \\ \hline \end{array} \begin{array}{ c } \hline 59 \\ \hline \end{array}$	hundred ten whole tenth <u>hundredth</u>		582.660
Total			2281.96