


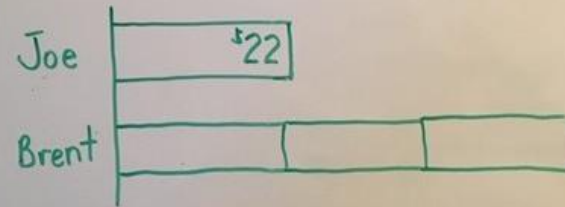
Equal Groups Story Problems (Multiplication and Division Comparison Problems)

C. Elkins (OK Math and Reading Lady www.cindyelkins.edublogs.org)

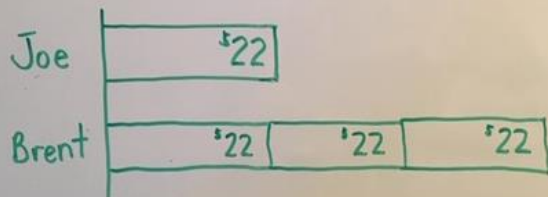
Joe has \$22. His brother Brent has three times more. How much \$ does Brent have?



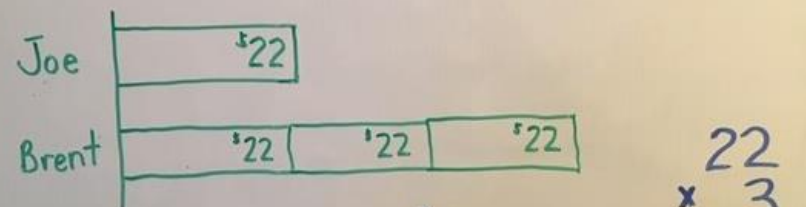
Joe has \$22. His brother Brent has three times more. How much \$ does Brent have?



Joe has \$22. His brother Brent has three times more. How much \$ does Brent have?




Joe has \$22. His brother Brent has three times more. How much \$ does Brent have?




Solve: $22 + 22 + 22 = \$66$ OR
$$\begin{array}{r} 22 \\ \times 3 \\ \hline 66 \end{array}$$

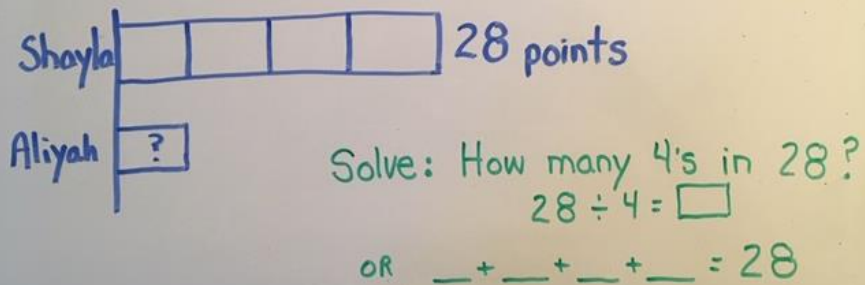
Shayla scored 28 points in a basketball game. Aliyah scored one fourth of this amount. How many points did Aliyah score?



Shayla scored 28 points in a basketball game. Aliyah scored one fourth of this amount. How many points did Aliyah score?



Shayla scored 28 points in a basketball game. Aliyah scored one fourth of this amount. How many points did Aliyah score?



Shayla scored 28 points in a basketball game. Aliyah scored one fourth of this amount. How many points did Aliyah score?

